

GATE 2019 (Solution)
GATE PHYSICS (PH) -2019

This question paper consists of **2 sections**, General Aptitude (**GA**) section for **15 marks** and the subject specific section (**PHYSICS**) for **85 marks**. Both these sections are compulsory.

There will be a total of 65 questions carrying 100 marks.

The GA section consists of 10 questions. Question numbers 1 to 5 are of 1 mark each, while question numbers 6 to 10 are of 2 marks each.

The subject specific **PH** section consists of **55** questions, out of which question numbers 1 to 25 are of 1 mark each, while question numbers 26 to 55 are of 2 marks each.

Use the data given in the question while answering that question. If such data are not given, and the paper has useful data, then the same can be viewed by clicking on the Useful Data button that appears at the top, right-hand side of the screen.

The question paper consists of Multiple Choice Questions (MCQ) and Numerical Answer Type (NAT).

(a) Multiple choice type questions have four choices (a), (b), (c) and (d) out of which only ONE is the correct answer.

(b) For Numerical answer type questions, a numerical answer should be entered.

All those questions that are not attempted will carry zero marks. However, wrong answers for multiple choice type questions (MCQ) will carry **NEGATIVE** marks. For multiple choice type questions, a wrong answering will lead to deduction of $\frac{1}{3}$ marks for a 1-mark question and $\frac{2}{3}$ marks for a 2-mark question. There is no negative marking for NAT questions.

Only Virtual Scientific Calculator is allowed. Charts, graph sheets, tables, cellular phone or other electronic gadgets are **NOT** allowed in the examination hall.

Learn Physics in Right Way

Section: General Aptitude

Q1 – Q5 carry one mark each.

Q1 The fishermen, _____ the flood victims owed their lives, were rewarded by the government.

- (a) whom (b) to which (c) to whom (d) that

Q2 Some students were not involved in the strike.

If the above statement is true, which of the following conclusions is/are logically necessary?

1. Some who were involved in the strike were students
2. No student was involved in the strike
3. At least one student was involved in the strike
4. Some who were not involved in the strike were students

- (a) 1 and 2 (b) 3 (c) 4 (d) 2 and 4

Q3. The radius as well as the height of a circular cone increases by 10 %. The percentage increase in its volume is _____.

- (a) 17.1 (b) 21.0 (c) 33.1 (d) 72.8

Q4 Five numbers 10, 7, 5, 4 and 2 are to be arranged in a sequence from left to right following the directions given below:

1. No two odd or even numbers are next to each other
 2. The second number from the left is exactly half of the left-most number
 3. The middle number is exactly twice the right-most number
- Which of the second number from the right?

- (a) 2 (b) 4 (c) 7 (d) 10

Q5 Until Iran came along, India had never been _____ in kabaddi.

- (a) defeated (b) defeating (c) defeat (d) defeatist

Q6 – Q10 carry two marks each.

Q6 Since the last one year, after a 125 basis point reduction in repo rate by the Reserve Bank of India, banking institutions have been making a demand to reduce interest rates on small saving schemes. Finally, the government announced yesterday a reduction in interest rates on small saving schemes to bring them on par with fixed deposit interest rates.

Which one of the following statements can be inferred from the given passage?

- (a) Whenever the Reserve Bank of India reduces the repo rate, the interest rates on small saving schemes are also reduced
- (b) Interest rates on small saving schemes are always maintained on par with fixed deposit interest rates
- (c) The government sometimes takes into consideration the demands of banking institutions before reducing the interest rates on small saving schemes
- (d) A reduction in interest rates on small saving schemes follow only after a reduction in repo rate by the Reserve Bank of India.
- Q7. In a country of 1400 million population 70% own mobile phones. Among the mobile phone owners, only 294 million access the Internet. Among these Internet users, only half buy goods from e-commerce portals. What is the percentage of these buyers in the country?
- (a) 10.50 (b) 14.70 (c) 15.00 (d) 50.00
- Q8. The nomenclature of Hindustani music has changed over the centuries. Since the medieval period dhrupad styles were identified as baanis. Terms like gayaki and baaj were used to refer to vocal and instrumental styles, respectively. With the institutionalization of music education the term gharana became acceptable. Gharana originally referred to hereditary musicians from a particular lineage, including disciples and grand disciples.
- Which one of the following pairings is NOT correct?
- (a) dhupad, baani (b) gayaki, vocal (c) baaj, institution (d) gharana, lineage
- Q9. Two trains started at 7 AM from the same point. The first train travelled north at a speed of 80 km/h and the second train travelled south at a speed of 100 km/h . The time at which they were 540 km apart is _____ A.M
- (a) 9 (b) 10 (c) 11 (d) 11.30
- Q10. "I read somewhere that in ancient times the prestige of a kingdom depended upon the number of taxes that it was able to levy on its people. It was very much like the prestige of a head-hunter in his won community."
- Based on the paragraph above, the prestige of a head-hunter depended upon _____
- (a) the prestige of the kingdom (b) the prestige of the heads
- (c) the number of taxes he could levy (d) the number of heads he could gather

SECTION: PHYSICS

Q1 – Q25 carry one mark each.

Solid State Physics

Q1. The relative magnetic permeability of a type-I super conductor is

- (a) 0 (b) -1 (c) 2π (d) $\frac{1}{4\pi}$

GATE 2019

Ans.: (a)

$$\text{Solution: } \vec{B} = \mu_0 (\vec{H} + \vec{M}) = \mu_0 (\vec{H} + \chi \vec{H}) = \mu_0 (1 + \chi) \vec{H} = \mu \vec{H}$$

$$\therefore \mu = \mu_0 (1 + \chi) \Rightarrow \mu_r = \frac{\mu}{\mu_0} = 1 + \chi$$

For type-I superconductor: $\chi = -1$

$$\therefore \mu_r = 1 - 1 = 0$$

Nuclear Particle Physics

Q2. Considering baryon number and lepton number conservation laws, which of the following process is/are allowed?

- (i) $p \rightarrow \pi^0 + e^+ + \nu_e$ (ii) $e^+ + \nu_e \rightarrow \mu^+ + \nu_\mu$
 (a) both (i) and (ii) (b) only (i) (c) only (ii) (d) neither (i) nor (ii)

GATE 2019

Ans. : (c)

$$\text{Solution: (i) } p \rightarrow \pi^0 + e^+ + \nu_e$$

$$B: \quad +1 \quad 0 \quad 0 \quad 0 : \text{Not conserved}$$

Therefore, this is not an allowed process

$$\text{(ii) } e^+ + \nu_e \rightarrow \mu^+ + \nu_\mu$$

$$q: \quad +1 \quad 0 \quad +1 \quad 0 : \text{conserved}$$

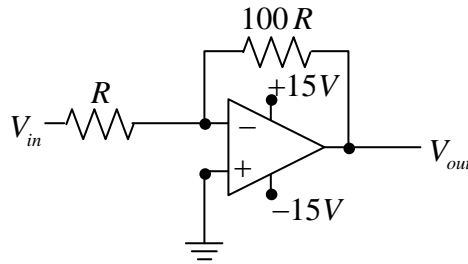
$$\text{spin: } \quad 1/2 \quad 1/2 \quad 1/2 \quad 1/2 : \text{conserved}$$

$$L_e: \quad -1 \quad +1 \quad 0 \quad 0 : \text{conserved}$$

$$L_\mu: \quad 0 \quad 0 \quad -1 \quad +1 : \text{conserved}$$

Since neutrino is involve, therefore parity is violated. This is allowed through weak interaction

Q3. For the following circuit, what is the magnitude of V_{out} if $V_{in} = 1.5V$?



- (a) 0.015V (b) 0.15V (c) 15V (d) 150V

GATE 2019

Ans. : (c)

$$\text{Solution: } V_{out} = -\frac{100R}{R} \times 1.5 = -150V \Rightarrow |V_{out}| = 150V$$

Q4. For the differential equation $\frac{d^2y}{dx^2} - n(n+1)\frac{y}{x^2} = 0$, where n is a constant, the product of its two independent solutions is

- (a) $\frac{1}{x}$ (b) x (c) x^n (d) $\frac{1}{x^{n+1}}$

GATE 2019

Ans. : (b)

Solution: This is a Euler-Cauchy by differential equation whose characteristic equation is $m^2 - m - n(n+1) = 0$

$$\text{Therefore, } m = \frac{1 \pm \sqrt{1 + 4n(n+1)}}{2} \text{ or } m = \frac{1 \pm \sqrt{(2n+1)^2}}{2} = \frac{1 \pm (2n+1)}{2}$$

$$\text{or } m = 1+n, \text{ or } m = -n$$

$$\text{Therefore two independent solution are } y_1 = x^{1+n} \text{ and } y_2 = x^{-n}$$

$$\text{Therefore, } y_1 y_2 = x^{1+n-n} = x$$

Q5. Consider a one-dimensional gas of N non-interacting particles of mass m with the Hamiltonian for a single particle given by

$$H = \frac{p^2}{2m} + \frac{1}{2}m\omega^2(x^2 + 2x)$$

The high temperature specific heat in units of $R = Nk_B$ (k_B is the Boltzmann constant) is

- (a) 1 (b) 1.5 (c) 2 (d) 2.5

GATE 2019

Ans. : (c)

$$\text{Solution: } \langle H \rangle = \left\langle \frac{p^2}{2m} \right\rangle + \frac{1}{2} m \omega^2 \langle x^2 \rangle + \frac{1}{2} m \omega^2 \langle 2x \rangle = \frac{NkT}{2} + \frac{NkT}{2} + U_0$$

$$\langle H \rangle = NkT$$

$$C_V = \frac{\partial H}{\partial T} = NkT$$

- Q7. A large number N of ideal bosons, each of mass m , are trapped in a three-dimensional potential $V(r) = \frac{m\omega^2 r^2}{2}$. The bosonic system is kept at temperature T which is much lower than the Bose-Einstein condensation temperature T_c . The chemical potential (μ) satisfies

(a) $\mu \leq \frac{3}{2} \hbar \omega$

(b) $2\hbar\omega > \mu > \frac{3}{2} \hbar \omega$

(c) $3\hbar\omega > \mu > 2\hbar\omega$

(d) $\mu = 3\hbar\omega$

GATE 2019

Ans. : (a)

- Q8. During a rotation, vectors along the axis of rotation remain unchanged. For the rotation

matrix $\begin{pmatrix} 0 & 1 & 0 \\ 0 & 0 & -1 \\ -1 & 0 & 0 \end{pmatrix}$, the unit vector along the axis of rotation is

(a) $\frac{1}{3}(2\hat{i} - \hat{j} + 2\hat{k})$

(b) $\frac{1}{\sqrt{3}}(\hat{i} + \hat{j} - \hat{k})$

(c) $\frac{1}{\sqrt{3}}(\hat{i} - \hat{j} - \hat{k})$

(d) $\frac{1}{3}(2\hat{i} + 2\hat{j} - \hat{k})$

GATE 2019

Ans. : (b)

Solution: Since the vector along the axis of rotation remain unchanged during rotation then

$$Ax = x \quad \dots (i)$$

$$\text{When } A = \begin{pmatrix} 0 & 1 & 0 \\ 0 & 0 & -1 \\ -1 & 0 & 0 \end{pmatrix}$$

Ans.: (b)

Solution: At low temperature, the optical branch phonons have energies higher than $k_B T$ and therefore, optical branch waves are not excited. And Debye model is not suitable for optical branch instead it is suitable for acoustical branch. Whereas Einstein model is useful for high temperature and therefore can be applied to optical branch.

Q12. The pole of the function $f(z) = \cot z$ at $z = 0$ is

- (a) a removable singularity (b) an essential singularity
(c) a simple pole (d) a second order pole

GATE 2019

Ans.: (c)

Solution: $f(z) = \cot z$ at $z = 0$

$$f(z) = \frac{1}{\tan z} \quad z = 0 \text{ is a simple pole} \quad f(z) = \frac{1}{z} \left[1 - \frac{1}{3}z^2 + \dots \right]$$

Nuclear Particle Physics

Q13. A massive particle X in free space decays spontaneously into two photons. Which of the following statements is true for X ?

- (a) X is charged
(b) Spin of X must be greater than or equal to 2
(c) X is a boson
(d) X must be a baryon

GATE 2019

Ans.: (c)

Solution: $X \rightarrow \gamma + \gamma$

$$q: \quad 0 \quad 0 \quad 0$$

$$\text{spin: } 0, 1, 2 \quad 1 \quad 1$$

Thus spin of X can be either 0, 1 or 2 (integer).

Therefore, option (b) is wrong while option (c) is correct.

Q14. The electric field of an electromagnetic wave is given by $\vec{E} = 3\sin(kz - \omega t)\hat{x} + 4\cos(kz - \omega t)\hat{y}$. The wave is

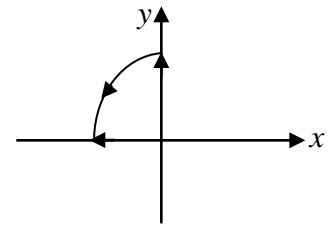
- (a) Linearly polarized at an angle $\tan^{-1}\left(\frac{4}{3}\right)$ from the x -axis
 (b) Linearly polarized at an angle $\tan^{-1}\left(\frac{3}{4}\right)$ from the x -axis
 (c) Elliptically polarized in clockwise direction when seen travelling towards the observer
 (d) Elliptically polarized in counter-clockwise direction when seen travelling towards the observer

Ans. : (d)

Solution: At $z = 0$, $E_x = -3\sin \omega t$, $E_y = 4\cos \omega t$

$$\text{At } \omega t = 0, E_x = 0, E_y = 4$$

$$\text{At } \omega t = \frac{\pi}{2}, E_x = -3, E_y = 0$$



GATE 2019

Nuclear Particle Physics

Q15. The nuclear spin and parity of ${}^{40}_{20}\text{Ca}$ in its ground state is

- (a) 0^+ (b) 0^- (c) 1^+ (d) 1^-

Ans.: (a)

Solution: ${}^{40}_{20}\text{Ca}$ is an even-even nuclei, therefore $I = 0, P = +ve$

$$\therefore \text{Spin-parity} = 0^+$$

Q16. An infinitely long thin cylindrical shell has its axis coinciding with the z -axis. It carries a surface charge density $\sigma_0 \cos \phi$, where ϕ is the polar angle and σ_0 is a constant. The magnitude of the electric field inside the cylinder is

- (a) 0 (b) $\frac{\sigma_0}{2\epsilon_0}$ (c) $\frac{\sigma_0}{3\epsilon_0}$ (d) $\frac{\sigma_0}{4\epsilon_0}$

GATE 2019

Ans. : (b)

$$\text{Solution: } dE' = \frac{d\lambda}{2\pi\epsilon_0 R} = \frac{(\sigma_0 \cos \phi)(Rd\phi)}{2\pi\epsilon_0 R} = \frac{\sigma_0 \cos \phi}{2\pi\epsilon_0} d\phi$$

$$\text{Resultant field inside } dE = dE' \sin \phi \Rightarrow E = \frac{\sigma_0}{2\pi\epsilon_0} \int_0^{2\pi} \sin^2 \phi d\phi = \frac{\sigma_0}{2\epsilon_0}$$

Solid State Physics

Q17. Consider a three-dimensional crystal of N inert gas atoms. The total energy is given by

$$U(R) = 2N \epsilon \left[p \left(\frac{\sigma}{R} \right)^{12} - q \left(\frac{\sigma}{R} \right)^6 \right], \text{ where } p = 12.13, q = 14.45 \text{ and } R \text{ is the nearest}$$

neighbour distance between two atoms. The two constants, ϵ and R , have the dimensions of energy and length, respectively. The equilibrium separation between two nearest neighbour atoms in units of σ (rounded off to two decimal places) is _____

GATE 2019

Ans.: 1.09

$$\text{Solution: } U(R) = 2N \epsilon \left[p \left(\frac{\sigma}{R} \right)^{12} - q \left(\frac{\sigma}{R} \right)^6 \right]$$

$$\frac{dU}{dR} = 0 \Rightarrow 2N \epsilon \left[12p \left(\frac{\sigma}{R} \right)^{11} \cdot \left(\frac{-\sigma}{R^2} \right) - 6q \left(\frac{\sigma}{R} \right)^5 \left(\frac{-\sigma}{R^2} \right) \right] = 0$$

$$\Rightarrow 12p \frac{\sigma^{12}}{R^{13}} - 6q \frac{\sigma^6}{R^7} = 0 \Rightarrow 12p \frac{\sigma^{12}}{R^{13}} = 6q \frac{\sigma^6}{R^7} \Rightarrow R^6 = \frac{12p}{6q} \sigma^6$$

$$\Rightarrow R = \left(\frac{2p}{q} \right)^{1/6} \sigma \quad \text{given } p = 12.13, q = 14.45$$

$$\therefore R = \left(\frac{2 \times 12.13}{14.45} \right)^{1/6} \sigma = (1.679)^{1/6} \sigma = 1.09 \sigma$$

$$\text{Thus } \frac{R}{\sigma} = 1.09$$

Solid State Physics

Q18. The energy-wavevector ($E - k$) dispersion relation for a particle in two dimensions is $E = Ck$, where C is a constant. If its density of states $D(E)$ is proportional to E^p then the value of p is_____

GATE 2019

Ans.: 1

Solution: For $E(k) \propto k^s$. The density of states in d -dimension is $D(E) \propto E^{\left(\frac{d}{s}-1\right)}$

$$\text{Given, } E = Ck \quad \therefore s = 1, d = 2$$

$$\text{Thus } D(E) \propto E^{\left(\frac{2-1}{1}\right)} \\ \propto E^1$$

Q19. A circular loop made of a thin wire has radius 2 cm and resistance 2Ω . It is placed perpendicular to a uniform magnetic field of magnitude $|\vec{B}_0| = 0.01$ Tesla. At time $t = 0$ the field starts decaying as $\vec{B} = \vec{B}_0 e^{-t/t_0}$, where $t_0 = 1\text{ s}$. The total charge that passes through a cross section of the wire during the decay is Q . The value of Q in μC (rounded off to two decimal places) is_____

GATE 2019

Ans. : 6.28

$$\text{Solution: } \varepsilon = -\frac{d\phi}{dt} = -\frac{A dB}{dt}, I = \frac{\varepsilon}{R} = -\frac{d\phi}{dt} \frac{1}{R}$$

$$\Rightarrow -\frac{d\phi}{dt} = -\pi r^2 \frac{d}{dt}(B_0 e^{-t/t_0}) = \pi r^2 B_0 e^{-t} (t_0 = 1)$$

$$Q = \int_0^{\infty} I(t) dt = \int_0^{\infty} \frac{\pi r^2}{R} B_0 e^{-t} dt = \frac{\pi r^2 B_0}{R} \left| \frac{e^{-t}}{-1} \right|_0^{\infty} = 3.14 \times (2 \times 10^{-2})^2 \times 0.01 = 6.28 \mu\text{C}$$

Q20. The electric field of an electromagnetic wave in vacuum is given by

$$\vec{E} = E_0 \cos(3y + 4z - 1.5 \times 10^9 t) \hat{x}$$

The wave is reflected from the $z = 0$ surface. If the pressure exerted on the surface is $\alpha \in E_0^2$, the value of α (rounded off to one decimal place) is_____

GATE 2019

Ans. : 0.8

Solution: $\vec{K} = 3\hat{y} + 4\hat{z} \Rightarrow \tan \theta_R = \frac{K_y}{K_z} = \frac{3}{4}$

$$P = 2 \frac{I}{c} \cos \theta_R = \frac{2}{c} \times \frac{1}{2} \epsilon_0 c E_0^2 \times \frac{4}{5} \Rightarrow P = 0.8 \epsilon_0 E_0^2$$

- Q22. The Hamiltonian for a particle of mass m is $H = \frac{p^2}{2m} + kqt$ where q and p are the generalized coordinate and momentum, respectively, t is time and k is a constant. For the initial condition, $q = 0$ and $p = 0$ at $t = 0$, $q(t) \propto t^\alpha$. The value of α is _____

GATE 2019

Ans. : 3

Solution: $\frac{\partial H}{\partial p} = \dot{q} = \frac{p}{m}$ (1)

$$\frac{\partial H}{\partial q} = -\dot{p} = kt \Rightarrow p = -\frac{kt^2}{2} \quad \dots(2)$$

$$\frac{dq}{dt} = -\frac{kt^2}{2} \Rightarrow q = -\frac{kt^3}{6} \Rightarrow q \propto t^3 \quad \text{so } \alpha = 3$$

- Q23. At temperature T Kelvin (K), the value of the Fermi function at an energy $0.5 eV$ above the Fermi energy is 0.01 . Then T , to the nearest integer, is _____
($k_B = 8.62 \times 10^{-5} eV / K$)

GATE 2019

Ans. : 1262

Solution: $F(E) = \frac{1}{e^{(E-E_F)/k_B T} + 1} \Rightarrow e^{(E-E_F)/k_B T} + 1 = \frac{1}{F(E)}$

$$\Rightarrow e^{-(E-E_F)/k_B T} = \frac{1-F}{F} \Rightarrow \frac{E-E_F}{k_B T} = \ln\left(\frac{1-F}{F}\right) \Rightarrow T = \frac{E-E_F}{k_B \ln\left(\frac{1-F}{F}\right)}$$

$$\therefore T = \frac{0.5}{8.62 \times 10^{-5} \ln\left(\frac{0.99}{0.01}\right)} = \frac{0.5}{8.62 \times \ln(99)} = \frac{0.5 \times 10^5}{8.62 \times 4.595} = 1262.3 K$$

Solid State Physics

Q25. A conventional type-I superconductor has a critical temperature of 4.7 K at zero magnetic field and a critical magnetic field of 0.3 Tesla at 0 K . The critical field in Tesla at 2 K (rounded off to three decimal places) is _____

GATE 2019

Ans.: 0.246

$$\begin{aligned}\text{Solution: } H_c(T) &= H_0 \left[1 - \left(\frac{T}{T_c} \right)^2 \right] = 0.3 \left[1 - \left(\frac{2}{4.7} \right)^2 \right] = 0.3 \left[1 - (0.426)^2 \right] \\ &= 0.3 [1 - 0.181] = 0.3 \times 0.819 = 0.246 \text{ Atm}\end{aligned}$$

Q26 – Q55 carry two marks each.

Q26. Consider the following Boolean expression:

$$(\bar{A} + \bar{B}) \left[\overline{A(B+C)} \right] + A(\bar{B} + \bar{C})$$

It can be represented by a single three-input logic gate. Identify the gate

- (a) AND (b) OR (c) XOR (d) NAND

GATE 2019

Ans. : (d)

$$\text{Solution: } Y = (\bar{A} + \bar{B}) \left[\overline{A(B+C)} \right] + A(\bar{B} + \bar{C})$$

$$Y = (\bar{A} + \bar{B}) \left[\bar{A} + \overline{(B+C)} \right] + A\bar{B} + A\bar{C}$$

$$Y = (\bar{A} + \bar{B}) \left[\bar{A} + \bar{B}\bar{C} \right] + A\bar{B} + A\bar{C}$$

$$Y = \bar{A} + \bar{A}\bar{B}\bar{C} + \bar{A}\bar{B} + \bar{B}\bar{C} + A\bar{B} + A\bar{C}$$

$$Y = \bar{A} + \bar{A}\bar{B}\bar{C} + \bar{B}\bar{C} + \bar{A}\bar{B} + A\bar{B} + A\bar{C}$$

$$Y = \bar{A} + \bar{B}\bar{C} + \bar{B} + A\bar{C} = \bar{A} + \bar{B} + A\bar{C}$$

$$Y = (\bar{A} + A\bar{C}) + \bar{B} = (\bar{A} + \bar{A}\bar{C}) + \bar{B} = \bar{A} + \bar{C} + \bar{B}$$

$$\Rightarrow Y = \overline{ABC}$$

Q27. The value of the integral $\int_{-\infty}^{\infty} \frac{\cos(kx)}{x^2 + a^2} dx$, where $k > 0$ and $a > 0$, is

- (a) $\frac{\pi}{a} e^{-ka}$ (b) $\frac{2\pi}{a} e^{-ka}$ (c) $\frac{\pi}{2a} e^{-ka}$ (d) $\frac{3\pi}{2a} e^{-ka}$

GATE 2019

Ans. : (a)

$$\text{Solution: } \int_{-\infty}^{\infty} \frac{\cos kx}{x^2 + a^2} dx$$

$$f(z) = \frac{e^{ikx}}{z^2 + a^2} = \frac{e^{ikz}}{(z+ia)(z-ia)}$$

$$I = \text{Re}.2\pi i \times \frac{e^{ik(ia)}}{2ia} = \frac{\pi e^{-ka}}{a}$$

Q29. A solid cylinder of radius R has total charge Q distributed uniformly over its volume. It is rotating about its axis with angular speed ω . The magnitude of the total magnetic moment of the cylinder is

- (a) $QR^2\omega$ (b) $\frac{1}{2}QR^2\omega$ (c) $\frac{1}{4}QR^2\omega$ (d) $\frac{1}{8}QR^2\omega$

GATE 2019

Ans. : (c)

$$\text{Solution: Magnetic moment due to disc } \mu = \frac{\pi\sigma\omega R^4}{4}$$

$$\text{Due to cylinder } d\mu = \frac{\pi\omega R^4}{4}(\rho dz) \quad (\sigma \rightarrow \rho dz)$$

$$\mu = \frac{\pi\omega R^4}{4} \int_0^L \frac{Q}{\pi R^2 L} dz = \frac{Q\omega R^2}{4}$$

Q31. A 3-bit analog-to-digital converter is designed to digitize analog signals ranging from $0V$ to $10V$. For this converter, the binary output corresponding to an input of $6V$ is

- (a) 011 (b) 101 (c) 100 (d) 010

GATE 2019

Ans. : (c)

Solution: $0 \rightarrow (000) \rightarrow 0V$

$$1 \rightarrow (001) \rightarrow \frac{10}{7} = 1.42V$$

$$2 \rightarrow (010) \rightarrow \frac{20}{7} = 2.8V$$

$$3 \rightarrow (011) \rightarrow \frac{30}{7} = 4.28V$$

$$4 \rightarrow (100) \rightarrow \frac{40}{7} = 5.71V$$

$$5 \rightarrow (101) \rightarrow \frac{50}{7} = 7.14V$$

$$6 \rightarrow (110) \rightarrow \frac{60}{7} = 8.57V$$

$$7 \rightarrow (111) \rightarrow \frac{70}{7} = 10V$$

Solid State Physics

Q33. A particle of mass m moves in a lattice along the x -axis in a periodic potential $V(x) = V(x+d)$ with periodicity d . The corresponding Brillouin zone extends from $-k_0$ to k_0 with these two k -points being equivalent. If a weak force F in the x -direction is applied to the particle, it starts a periodic motion with the time period T .

Using the equation of motion $F = \frac{dp_{\text{crystal}}}{dt}$ for a particle moving in a band, where p_{crystal} is the crystal momentum of the particle, the period T is found to be (h is Planck constant)

(a) $\sqrt{\frac{2md}{F}}$ (b) $2\sqrt{\frac{2md}{F}}$ (c) $\frac{2h}{Fd}$ (d) $\frac{h}{Fd}$

GATE 2019

Ans. : (d)

Solution: $\Delta E = E \int_0^d F dx = F [x]_0^d = Fd$

Using Heisenberg uncertainty $\Delta E \cdot \Delta t = h$, $T = \Delta t = \frac{h}{\Delta E} = \frac{h}{Fd}$. Thus correct option is (d)

Atomic and Molecular Physics

Q35. The spin-orbit interaction term of an electron moving in a central field is written as $f(r)\vec{l} \cdot \vec{s}$, where r is the radial distance of the electron from the origin. If an electron moves inside a uniformly charged sphere, then

(a) $f(r) = \text{constant}$ (b) $f(r) \propto r^{-1}$ (c) $f(r) \propto r^{-2}$ (d) $f(r) \propto r^{-3}$

GATE 2019

Ans. : (a)

Solution: The electric potential of a uniformly charged sphere at $r < R$ is

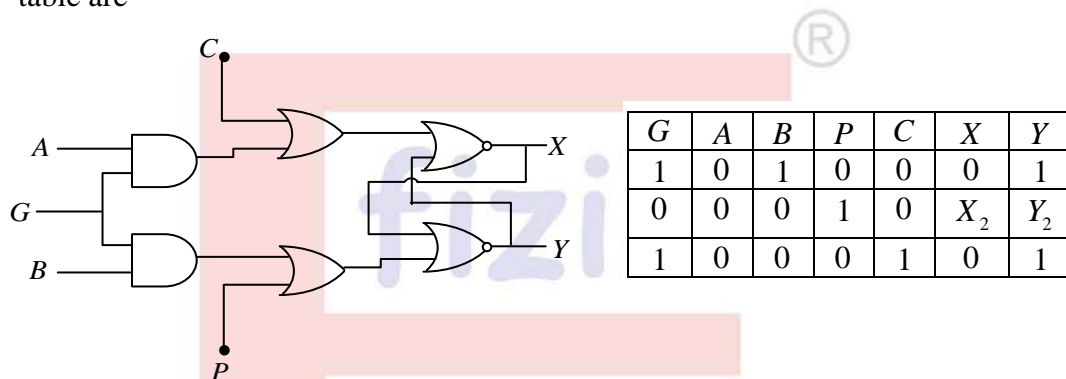
$$V = \frac{kQ}{2R} \left(3 - \frac{r^2}{R^2} \right)$$

where Q is the electric charge on the sphere of radius R and k is a constant.

The interaction energy is $W = f(r)\vec{l} \cdot \vec{s}$, where for central potential V , $f(r) = \frac{1}{r} \left(\frac{\partial V}{\partial r} \right)$

$\therefore f(r) = \frac{1}{r} \left[\frac{-kQr}{R^3} \right] = \frac{-kQ}{R^3} = \text{constant}$. Thus option (a) is correct.

Q36. For the following circuit, the correct logic values for the entries X_2 and Y_2 in the truth table are



(a) 1 and 0

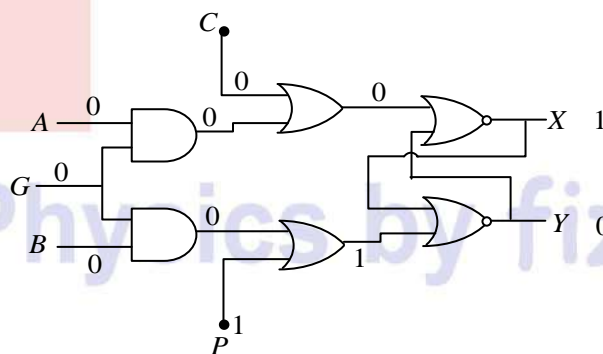
(b) 0 and 0

(c) 0 and 1

(d) 1 and 1

GATE 2019

Ans. : (a)



Q37. In a set of N successive polarizers, the m^{th} polarizer makes an angle $\left(\frac{m\pi}{2N} \right)$ with the vertical. A vertically polarized light beam of intensity I_0 is incident on two such sets with $N = N_1$ and $N = N_2$, where $N_2 > N_1$. Let the intensity of light beams coming out be $I(N_1)$ and $I(N_2)$, respectively. Which of the following statements is correct about the two outgoing beams?

(a) $I(N_2) > I(N_1)$; the polarization in each case is vertical

(b) $I(N_2) < I(N_1)$; the polarization in each case is vertical

(c) $I(N_2) > I(N_1)$; the polarization in each case is horizontal

(d) $I(N_2) < I(N_1)$; the polarization in each case is horizontal

GATE 2019

Ans. : (c)

Solution: $I(N_1) = I_0 \left[\cos\left(\frac{n/2}{N_1}\right) \right]^{2N_1}$, $I(N_2) = I_0 \left[\cos\left(\frac{n/2}{N_2}\right) \right]^{2N_2}$

$I(N_2) > I(N_1)$

For last polarization, pass axis will be horizontal. [®]

Ex: $N_1 = 5$

$I(5) = I_0 \left[\cos(18^\circ) \right]^{10} = 0.605 I_0$

$N_2 = 10$

$I(10) = I_0 \left[\cos(9^\circ) \right]^{20} = 0.780 I_0$

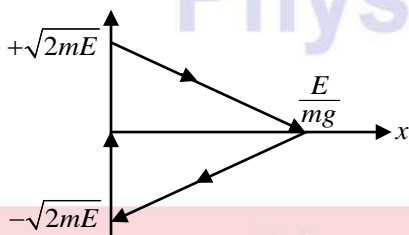
$I(10) > I(5)$

Q38. A ball bouncing of a rigid floor is described by the potential energy function

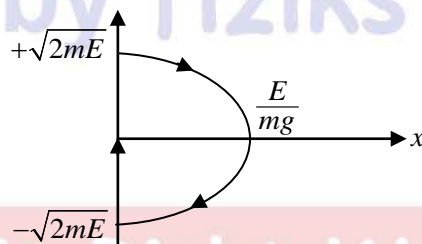
$$V(x) = \begin{cases} mgx & \text{for } x > 0 \\ \infty & \text{for } x \leq 0 \end{cases}$$

Which of the following schematic diagrams best represents the phase space plot of the ball?

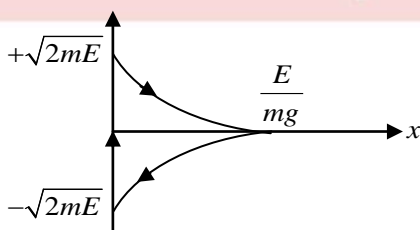
(a)



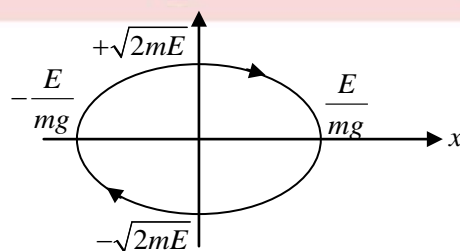
(b)



(c)



(d)



GATE 2019

Ans. : (b)

Solution: $E = \frac{p^2}{2m} + mgx \Rightarrow p^2 = 2m(E - mgx)$ which is equation of parabola

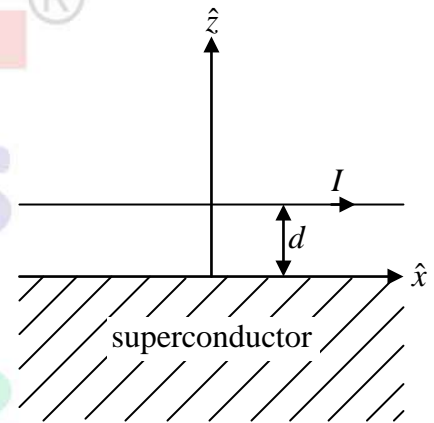
- Q39. An infinitely long wire parallel to the x -axis is kept at $z = d$ and carries a current I in the positive x direction above a superconductor filling the region $z \leq 0$ (see figure). The magnetic field \vec{B} inside the superconductor is zero so that the field just outside the superconductor is parallel to its surface. The magnetic field due to this configuration at a point $(x, y, z > 0)$ is

(a) $\left(\frac{\mu_0 I}{2\pi}\right) \frac{-(z-d)\hat{j} + y\hat{k}}{y^2 + (z-d)^2}$

(b) $\left(\frac{\mu_0 I}{2\pi}\right) \left[\frac{-(z-d)\hat{j} + y\hat{k}}{y^2 + (z-d)^2} + \frac{(z+d)\hat{j} - y\hat{k}}{y^2 + (z+d)^2} \right]$

(c) $\left(\frac{\mu_0 I}{2\pi}\right) \left[\frac{-(z-d)\hat{j} + y\hat{k}}{y^2 + (z-d)^2} - \frac{(z+d)\hat{j} - y\hat{k}}{y^2 + (z+d)^2} \right]$

(d) $\left(\frac{\mu_0 I}{2\pi}\right) \left[\frac{y\hat{j} + (z-d)\hat{k}}{y^2 + (z-d)^2} + \frac{y\hat{j} - (z+d)\hat{k}}{y^2 + (z+d)^2} \right]$



GATE 2019

Ans. : (b)

Solution: Verify that $\vec{B} = 0$, when $d = 0$ (Magnetic field can not penetrate the superconductor)

- Q40. The vector potential inside a long solenoid with n turns per unit length and carrying current I , written in cylindrical coordinates is $\vec{A}(s, \phi, z) = \frac{\mu_0 n I}{2} s \hat{\phi}$. If the term

$\frac{\mu_0 n I}{2} s (\alpha \cos \phi \hat{\phi} + \beta \sin \phi \hat{s})$, where $\alpha \neq 0, \beta \neq 0$ is added to $\vec{A}(s, \phi, z)$, the magnetic field remains the same if

- (a) $\alpha = \beta$ (b) $\alpha = -\beta$ (c) $\alpha = 2\beta$ (d) $\alpha = \frac{\beta}{2}$

$$\left[\begin{array}{l} \text{Useful formulae: } \vec{\Delta} t = \frac{\partial t}{\partial s} \hat{s} + \frac{1}{s} \frac{\partial t}{\partial \phi} \hat{\phi} + \frac{\partial t}{\partial z} \hat{z}; \\ \vec{\nabla} \times \vec{v} = \left(\frac{1}{s} \frac{\partial v_z}{\partial \phi} - \frac{\partial v_\phi}{\partial z} \right) \hat{s} + \left(\frac{\partial v_s}{\partial z} - \frac{\partial v_z}{\partial s} \right) \hat{\phi} + \frac{1}{s} \left(\frac{\partial (s v_\phi)}{\partial s} - \frac{\partial v_s}{\partial \phi} \right) \hat{z} \end{array} \right]$$

GATE 2019

Ans. : (d)

$$\text{Solution: } \vec{B} = \vec{\nabla} \times \vec{A} = \frac{1}{r} \begin{vmatrix} \hat{r} & r\hat{\phi} & \hat{z} \\ \frac{\partial}{\partial r} & \frac{\partial}{\partial \phi} & \frac{\partial}{\partial z} \\ A_r & rA_\phi & 0 \end{vmatrix} \Rightarrow \vec{B} = \frac{1}{s} \begin{vmatrix} \hat{s} & s\hat{\phi} & \hat{z} \\ \frac{\partial}{\partial s} & \frac{\partial}{\partial \phi} & \frac{\partial}{\partial z} \\ 0 & s \times \frac{\mu_0 n I}{2} s & 0 \end{vmatrix} = \mu_0 n I \hat{z}$$

$$\vec{A}'(s, \phi, z) = \frac{\mu_0 n I}{2} s \hat{\phi} + \frac{\mu_0 n I}{2} s (\alpha \cos \phi \hat{\phi} + \beta \sin \phi \hat{s}) = \frac{\mu_0 n I}{2} s (\alpha \cos \phi + 1) \hat{\phi}$$

$$\vec{B}' = \vec{\nabla} \times \vec{A}' = \frac{1}{r} \begin{vmatrix} \hat{r} & r\hat{\phi} & \hat{z} \\ \frac{\partial}{\partial r} & \frac{\partial}{\partial \phi} & \frac{\partial}{\partial z} \\ A_r & rA_\phi & 0 \end{vmatrix} \Rightarrow \vec{B}' = \left(\frac{\mu_0 n I}{2} \right) \frac{1}{s} \begin{vmatrix} \hat{s} & s\hat{\phi} & \hat{z} \\ \frac{\partial}{\partial s} & \frac{\partial}{\partial \phi} & \frac{\partial}{\partial z} \\ s\beta \sin \phi & s \times s (\alpha \cos \phi + 1) & 0 \end{vmatrix}$$

$$\Rightarrow \vec{B}' = \left(\frac{\mu_0 n I}{2} \right) \frac{1}{s} \hat{z} [2s(\alpha \cos \phi + 1) - s\beta \cos \phi] = \mu_0 n I \left[(\alpha \cos \phi + 1) - \frac{\beta \cos \phi}{2} \right] \hat{z}$$

$$\text{Equate } \vec{B}' = \vec{B} \Rightarrow \left[(\alpha \cos \phi + 1) - \frac{\beta \cos \phi}{2} \right] \mu_0 n I = \mu_0 n I$$

$$\Rightarrow \alpha \cos \phi = \frac{\beta}{2} \cos \phi \Rightarrow \alpha = \frac{\beta}{2}$$

Nuclear and particle Physics

Q41. Low energy collision (s -wave scattering) of pion (π^+) with deuteron (d) results in the production of two proton ($\pi^+ + d \rightarrow p + p$). The relative orbital angular momentum (in units of \hbar) of the resulting two-proton system for this reaction is

- (a) 0 (b) 1 (c) 2 (d) 3

GATE 2019

Ans.: (b)

$$\text{Solution: } \pi^+ + d \rightarrow p + p$$

$$\text{Parity: } (-1) \times (+1) \quad (-1)^l \pi_p \pi_p$$

$$\therefore (-1)^l \pi_p \pi_p = -1$$

$$\text{Since } \pi_p = +1 \quad \therefore (-1)^l = -1$$

Thus, $l = 1$.

Q42. Consider the Hamiltonian $H(q, p) = \frac{\alpha p^2 q^4}{2} + \frac{\beta}{q^2}$, where α and β are parameters with appropriate dimensions, and q and p are the generalized coordinate and momentum, respectively. The corresponding Lagrangian $L(q, \dot{q})$ is

- (a) $\frac{1}{2\alpha} \frac{\dot{q}^2}{q^4} - \frac{\beta}{q^2}$ (b) $\frac{2}{\alpha} \frac{\dot{q}^2}{q^4} + \frac{\beta}{q^2}$ (c) $\frac{1}{\alpha} \frac{\dot{q}^2}{q^4} + \frac{\beta}{q^2}$ (d) $-\frac{1}{2\alpha} \frac{\dot{q}^2}{q^4} + \frac{\beta}{q^2}$

GATE 2019

Ans. : (a)

Solution: $L = p\dot{q} - H \Rightarrow p\dot{q} - \frac{\alpha p^2 q^4}{2} - \frac{\beta}{q^2}$ from Hamiltonian equation of motion

$$\frac{\partial H}{\partial p} = \dot{q} \Rightarrow p = \frac{\dot{q}}{\alpha q^4}$$

$$L = \frac{1}{2\alpha} \frac{\dot{q}^2}{q^4} - \frac{\beta}{q^2}$$

Q43. For a given load resistance $R_L = 4.7$ ohm, the power transfer efficiencies $\left(\eta = \frac{P_{load}}{P_{total}}\right)$ of a dc voltage source and a dc current source with internal resistances R_1 and R_2 , respectively, are equal. The product $R_1 R_2$ in units of ohm^2 (rounded off to one decimal place) is _____

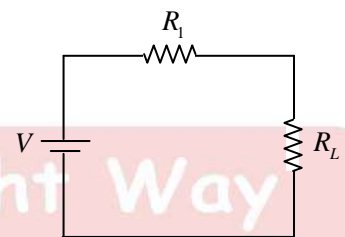
GATE 2019

Ans. : 22.09

Solution: For dc voltage source

$$P_{total} = \frac{V^2}{R_1 + R_L} \text{ and } P_{R_L} = \left(\frac{V}{R_1 + R_L}\right)^2 R_L$$

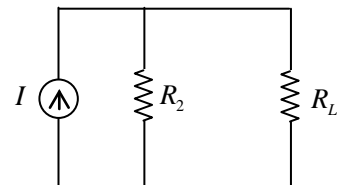
$$\eta_{dc vol} = \frac{P_{R_L}}{P_{total}} = \frac{R_L}{R_1 + R_L}$$



For dc current source

$$P_{total} = I^2 \left(\frac{R_2 R_L}{R_2 + R_L}\right) \text{ and } P_{R_L} = I_L^2 R_L = \left(\frac{R_2 I}{R_2 + R_L}\right)^2 R_L$$

$$\eta_{dc curr} = \frac{P_{R_L}}{P_{total}} = \frac{R_2}{R_2 + R_L}$$

Since $\eta_{dc vol} = \eta_{dc curr}$

$$\Rightarrow \frac{R_L}{R_1 + R_L} = \frac{R_2}{R_2 + R_L} \Rightarrow R_L(R_2 + R_L) = R_2(R_1 + R_L) \Rightarrow R_1 R_2 = R_L^2$$

$$\Rightarrow R_1 R_2 = (4.7)^2 = 22.09 \Omega^2$$

Atomic and Molecular Physics

Q44. The ground state electronic configuration of the rare-earth ion (Nd^{3+}) is $[Pd]4f^3 5s^2 5p^6$. Assuming LS coupling, the Lande g -factor of this ion is $\frac{8}{11}$. The effective magnetic moment in units of Bohr magneton μ_B (rounded off to two decimal places) is _____.

GATE 2019

Ans.: 3.62

Solution:

For $4f^3$ $L=6$, $S=3/2$, $J=9/2$

$$M_L = \begin{array}{ccccccc} -3 & -2 & -1 & 0 & +1 & +2 & +3 \\ \uparrow & \uparrow & \uparrow & & & & \end{array}$$

$$\therefore \mu = g_J \mu_B \sqrt{J(J+1)} = \frac{8}{11} \times \mu_B \times \sqrt{\frac{9}{2} \left(\frac{9}{2} + 1 \right)}$$

$$= \frac{8}{11} \sqrt{\frac{9}{2} \times \frac{11}{2}} \mu_B = 3.62 \mu_B$$

Q45. A projectile of mass 1 kg is launched at an angle of 30° from the horizontal direction at $t=0$ and takes time T before hitting the ground. If its initial speed is 10 ms^{-1} , the value of the action integral for the entire flight in the units of $\text{kgm}^2\text{s}^{-1}$ (round off to one decimal place) is _____. [Take $g = 10\text{ ms}^{-2}$]

GATE 2019

Ans.: 33.3

$$\text{Solution: } T = \frac{2v \sin \theta}{g} = 1 \text{ sec}$$

$$L = \frac{1}{2} m (\dot{x}^2 + \dot{y}^2) - mgy$$

$$\dot{x} = v \cos \theta = 5\sqrt{3}\text{ ms}^{-1} \quad \dot{y} = v \sin \theta - gt = 5 - 10t$$

$$y = ut - \frac{1}{2} gt^2 = v \sin \theta t - \frac{1}{2} gt^2 = 10 \cdot \frac{1}{2} t - \frac{1}{2} 10t^2 = 5t - 5t^2$$

$$L = \frac{1}{2} 1 \left((5\sqrt{3})^2 + (5-10t)^2 \right) - 1 \times 10 \times (5t - 5t^2)$$

$$L = 100t^2 - 100t + 50$$

$$A = \int_0^T L dt = \int_0^1 (100t^2 - 100t + 50) dt = 33.3$$

Q46. Let θ be a variable in the range $-\pi \leq \theta < \pi$. Now consider a function

$$\psi(\theta) = \begin{cases} 1 & \text{for } \frac{-\pi}{2} \leq \theta < \frac{\pi}{2} \\ 0 & \text{otherwise} \end{cases}$$

if its Fourier-series is written as $\psi(\theta) = \sum_{m=-\infty}^{\infty} C_m e^{-im\theta}$, then the value of $|C_3|^2$ (rounded off to three decimal places) is _____.

GATE 2019

Ans. : 0.011

Solution: The Fourier coefficient C_n is $C_m = \frac{1}{2l} \int_{-\pi}^{\pi} f(x) e^{im\theta} d\theta$

Here $2l = 2\pi$,

$$\text{Therefore, } C_m = \frac{1}{2\pi} \int_{-\pi/2}^{\pi/2} (1) e^{im\theta} d\theta = \frac{1}{2\pi} \cdot \frac{1}{im} \left\{ e^{im\theta} \right\}_{-\pi/2}^{\pi/2} = \frac{1}{2\pi im} \left[e^{\pi im/2} - e^{-\pi im/2} \right]$$

For $m = 3$

$$C_3 = \frac{1}{6\pi i} \left[e^{3\pi i/2} - e^{-3\pi i/2} \right]$$

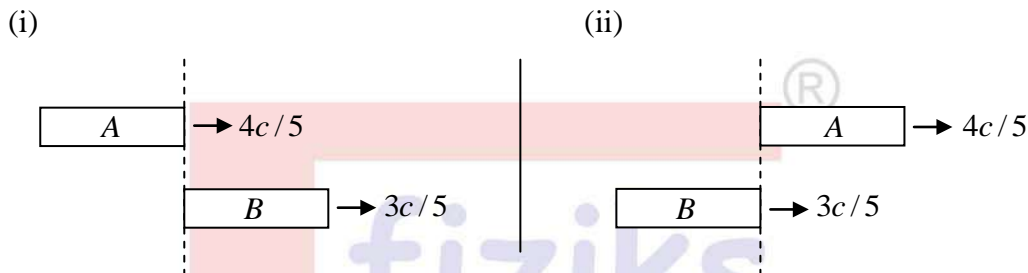
$$\text{or, } C_3 = \frac{1}{6\pi i} \left(2i \sin \frac{3\pi}{2} \right) = \frac{1}{3\pi} \sin \frac{3\pi}{2} = \frac{1}{3\pi} (-1) = -\frac{1}{3\pi}$$

$$\text{Therefore, } |C_3|^2 = \left(\frac{1}{3\pi} \right)^2 = \frac{1}{9\pi^2} = 0.011$$

Learn Physics in Right Way

STR

Q47. Two spaceships A and B , each of the same rest length L , are moving in the same direction with speeds $\frac{4c}{5}$ and $\frac{3c}{5}$, respectively, where c is the speed of light. As measured by B , the time taken by A to completely overtake B [see figure below] in units of L/c (to the nearest integer) is _____



GATE 2019

Ans. : 5

Solution:
$$u_{A,B} = \frac{\frac{4}{5}c - \frac{3}{5}c}{1 - \frac{4}{5}c \cdot \frac{3}{5}c \cdot \frac{1}{c^2}} = \frac{\frac{c}{5}}{\frac{13}{25}} = \frac{5}{13}c$$

Kinematic equation is given by

$$\frac{5}{13}c \times t = L\sqrt{1 - \frac{25}{169}} + L \Rightarrow t = \frac{5L}{c} \Rightarrow \alpha = 5$$

Nuclear and Particle Physics

Q48. A radioactive element X has a half-life of 30 hours. It decays via alpha, beta and gamma emissions with the branching ratio for beta decay being 0.75. The partial half-life for beta decay in unit of hours is _____

GATE 2019

Ans.: 40

Solution: Branching ratio is the fraction of particles (here β) which decays by an individual decay mode with respect to the total number of particles which decays

$$BR = \frac{\left(\frac{dN}{dt}\right)_x}{\left(\frac{dN}{dt}\right)_\beta} = \frac{(T_{1/2})_x}{(T_{1/2})_\beta} \Rightarrow (T_{1/2})_\beta = \frac{(T_{1/2})_x}{BR} = \frac{30}{0.75} = 40 \text{ hours}$$

- Q49. In a thermally insulated container, 0.01 kg of ice at 273 K is mixed with 0.1 kg of water at 300 K . Neglecting the specific heat of the container, the change in the entropy of the system in J/K on attaining thermal equilibrium (rounded off to two decimal places) is _____

GATE 2019

Ans. : 1.03

Solution: $T_{eq} = 290.29 \text{ K}$ (Heat gain = Heat lost)

$$m_{ice}L + m_{ice}C(T - 273) = m_w C(300 - T)$$

$$T = 290.29 \text{ K}$$

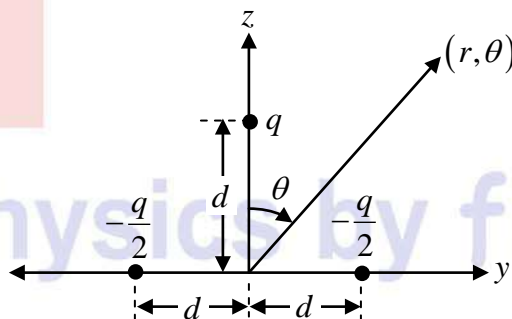
$$\Delta s = \Delta s_{ice} + \Delta s_{water}$$

$$(\Delta s)_{ice} = \frac{m_{ice}L}{T_{ice}} + m_{ice}C \ln \frac{T_i}{T_{ice}} = 14.85 \text{ J/K}$$

$$(\Delta s)_{water} = m_w C \ln \frac{290.29}{300} = -13.82 \text{ J/K}$$

$$\Delta S = 1.03 \text{ J/K}$$

- Q50. Consider a system of three charges as shown in the figure below:



For $r = 10 \text{ m}$; $\theta = 60$ degrees; $q = 10^{-6}$ Coulomb, and $d = 10^{-3} \text{ m}$, the electric dipole potential in volts (rounded off to three decimal places) at a point (r, θ) is _____

$$\left[\text{Use: } \frac{1}{4\pi\epsilon_0} = 9 \times 10^9 \frac{\text{Nm}^2}{\text{C}^2} \right]$$

GATE 2019

Ans. : 0.045

Solution: Monopole moment $= -\frac{q}{2} - \frac{q}{2} + q = 0$

$$\vec{p} = -\frac{q}{2} \times (-d\hat{y}) - \frac{q}{2}(d\hat{y}) + q(d\hat{z}) \Rightarrow \vec{p} = qd\hat{z}$$

$$V(r, \theta) = \frac{1}{4\pi \epsilon_0} \frac{\vec{p} \cdot \hat{r}}{r^2} = \frac{1}{4\pi \epsilon_0} \frac{qd \cos \theta}{r^2}$$

$$V(r, \theta) = 9 \times 10^9 \times \frac{10^{-6} \times 10^{-3} \times \cos 60^\circ}{(10)^2} = 9 \times 10^9 \times \frac{10^{-9}}{2 \times 100} = 0.045 \text{ Volts}$$

- Q51. Consider two system A and B each having two distinguishable particles. In both the systems, each particle can exist in states with energies 0,1,2 and 3 units with equal probability. The total energy of the combined system is 5 units. Assuming that the system A has energy 3 units and the system B has energy 2 units, the entropy of the system is $k_B \ln \lambda$. The value of λ is _____

GATE 2019

Ans. : 12

Solution:

$E_A = 3$				$E_B = 2$				
A	B			3	A	B		
		A	B	2			AB	
		B	A	1	B	A		
B	A			0				
$\Omega_A = 4$				$\Omega_B = 3$				

$$\Omega = 4 \times 3 = 12$$

$$S = \ln \Omega = k_B \ln 12$$

$$\lambda = 12.$$

- Q54. Two events, one on the earth and the other one on the Sun, occur simultaneously in the earth's frame. The time difference between the two events as seen by an observer in a spaceship moving with velocity $0.5c$ in the earth's frame along the line joining the earth to the Sun is Δt , where c is the speed of light. Given that light travels from the Sun to the earth in 8.3 minutes in the earth's frame, the value of $|\Delta t|$ in minutes (rounded off to two decimal places) is _____

(Take the earth's frame to be inertial and neglect the relative motion between the earth and the sun)

GATE 2019

Ans. : 4.77

$$\text{Solution: } t'_2 - t'_1 = 0 \quad x'_2 - x'_1 = 8.3 \times 3 \times 10^8 \times 60 \quad v = 0.5c$$

$$\Delta t = t_2 - t_1 = \left(\frac{t'_2 + \frac{vx'_2}{c^2}}{\sqrt{1 - \frac{v^2}{c^2}}} \right) - \left(\frac{t'_1 + \frac{vx'_1}{c^2}}{\sqrt{1 - \frac{v^2}{c^2}}} \right) = \left(\frac{t'_2 - t'_1}{\sqrt{1 - \frac{v^2}{c^2}}} \right) + \frac{v}{c^2} \frac{(x'_2 - x'_1)}{\sqrt{1 - \frac{v^2}{c^2}}} = 4.77 \text{ min}$$

Solid State Physics

Q55. In a certain two-dimensional lattice, the energy dispersion of the electrons is

$$\varepsilon(\vec{k}) = -2t \left[\cos k_x a + 2 \cos \frac{1}{2} k_x a \cos \frac{\sqrt{3}}{2} k_y a \right] \text{ (R)}$$

where $\vec{k} = (k_x, k_y)$ denotes the wave vector, a is the lattice constant and t is a constant in units of eV . In this lattice the effective mass tensor m_{ij} of electrons calculated at the center of the Brillouin zone has the form $m_{ij} = \frac{\hbar^2}{ta^2} \begin{pmatrix} \alpha & 0 \\ 0 & \alpha \end{pmatrix}$. The value of α (rounded off to two decimal places) is _____

GATE 2019

Ans.: 0.33

Solution: Effective mass tensor matrix 4

$$m_{ij} = \begin{bmatrix} \frac{1}{m_{xx}} & \frac{1}{m_{xy}} \\ \frac{1}{m_{yx}} & \frac{1}{m_{yy}} \end{bmatrix} = \begin{bmatrix} \frac{1}{m_{xx}} & 0 \\ 0 & \frac{1}{m_{yy}} \end{bmatrix}$$

$$\text{When } m_{xx} = \frac{\hbar^2}{\partial^2 E / \partial k_x^2} \text{ and } m_{yy} = \frac{\hbar^2}{\partial^2 E / \partial k_y^2}$$

$$\text{Now } \frac{\partial E}{\partial k_x} = 2t \left[a \sin k_x a + a \sin \left(\frac{1}{2} k_x a \right) \cos \left(\frac{\sqrt{3}}{2} k_y a \right) \right]$$

$$\frac{\partial^2 E}{\partial k_x^2} = 2t \left[a^2 \cos(k_x a) + \frac{a^2}{2} \cos \left(\frac{1}{2} k_x a \right) \cos \left(\frac{\sqrt{3}}{2} k_y a \right) \right]$$

At the Brillouin zone centre i.e. at $k_x = k_y = 0$

$$\therefore \frac{\partial^2 E}{\partial k_x^2} = 2ta^2 \left(1 + \frac{1}{2} \right) = 3ta^2$$

$$\text{Similarly, } \frac{\partial E}{\partial k_y} = 2t \left[\sqrt{3} a \cos \left(\frac{1}{2} k_x a \right) \sin \left(\frac{\sqrt{3}}{2} k_y a \right) \right]$$

$$\frac{\partial^2 E}{\partial k_y^2} = 2t \left[\frac{3a^2}{2} \cos\left(\frac{1}{2}k_x a\right) \cos\left(\frac{\sqrt{3}}{2}k_y a\right) \right]$$

At the Brillouin zone centre i.e. at $k_x = k_y = 0$

$$\frac{\partial^2 E}{\partial k_y^2} = 3ta^2$$

$$\text{Thus } m_{xx} = \frac{\hbar^2}{\partial^2 E / \partial k_x^2} = \frac{\hbar^2}{3ta^2} \text{ and } m_{yy} = \frac{\hbar^2}{\partial^2 E / \partial k_y^2} = \frac{\hbar^2}{3ta^2}$$

$$m_{ij} = \begin{bmatrix} \frac{\hbar^2}{3ta^2} & 0 \\ 0 & \frac{\hbar^2}{3ta^2} \end{bmatrix} = \frac{\hbar^2}{ta^2} \begin{bmatrix} \frac{1}{3} & 0 \\ 0 & \frac{1}{3} \end{bmatrix}$$

$$\text{Thus } \alpha = \frac{1}{3} = 0.333.$$

Physics by fiziks

Learn Physics in Right Way

Our Star Achievers



Kulwinder Kumar
NET / JRF AIR - 01
Classroom Course



Pargam Vashishtha
JRF AIR - 02
Classroom Course



Pritam Manna
GATE AIR - 03
Pre-Recorded Batch



Hitesh Pandey
IIT-JAM AIR - 03
Study Material



Manish Singh
JEST AIR - 03
Classroom Course



Sunish Prashar
JEST AIR - 04
Online Live Batch



Akash Naskar
IIT-JAM AIR - 05
Online Live Batch



Nirabindu Ganguly
JEST AIR - 06
Online Live Batch



Nishant Tripathi
JEST AIR - 10
Online Live Batch



Debosmita
NET AIR - 10
Online Live Batch



Prembrata Manna
NET AIR - 10
Online Live Batch

Our Star Achievers



Kulwinder Kumar
NET / JRF AIR - 01
Classroom Course



Pritam Manna
GATE AIR - 03
Pre-Recorded Batch



Hitesh Pandey
IIT-JAM AIR - 03
Study Material



Manish Singh
JEST AIR - 03
Classroom Course



Physics by fiziks

Learn Physics in Right Way

Pioneering Excellence Since Year 2008

Success Graph

